

Name _____

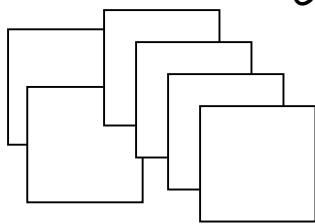
> Greater Smaller <

fill in the missing symbol

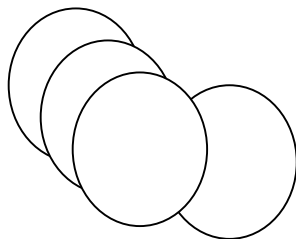
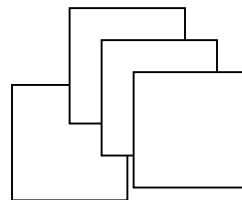
e.g. $9 > 5$	e.g. $3 < 7$	48 32	35 48
35 16	63 77	29 54	33 32
19 22	78 14	87 19	15 94

e.g. $29 > 15$	e.g. $13 < 37$	128 122	135 118
115 126	113 127	139 114	143 132
129 112	118 114	117 129	125 144


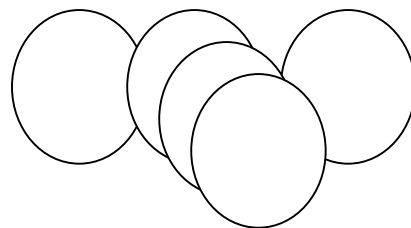
Circle the correct symbol



< >



< >



< >

