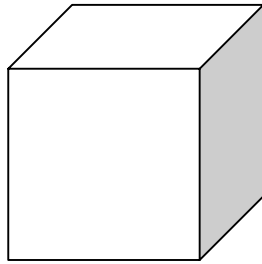
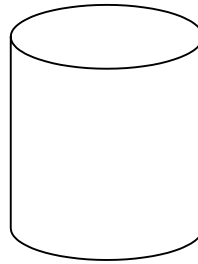



Name _____



Cube



Cylinder



Ball

a) Which shapes have corners? _____

b) Which shapes have curved surfaces? _____

c) Which shapes can roll? _____

Draw the shape of a clock



Draw the shape of a pencil



Draw the shape of a brick

